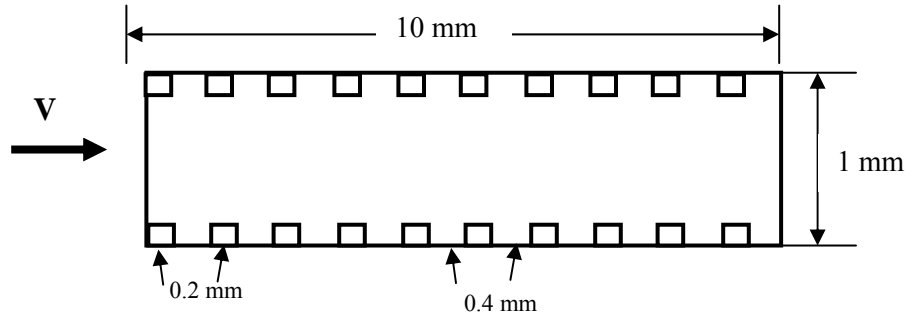


Electronic Cooling

a) For a duct assume that there are rectangular roughness elements 0.2 mm wide and with a height of 0.1 are mounted on the duct walls with a spacing of 0.4 mm. Evaluate the flow fields for the inlet velocities of 0.01 and 0.1 m/s.



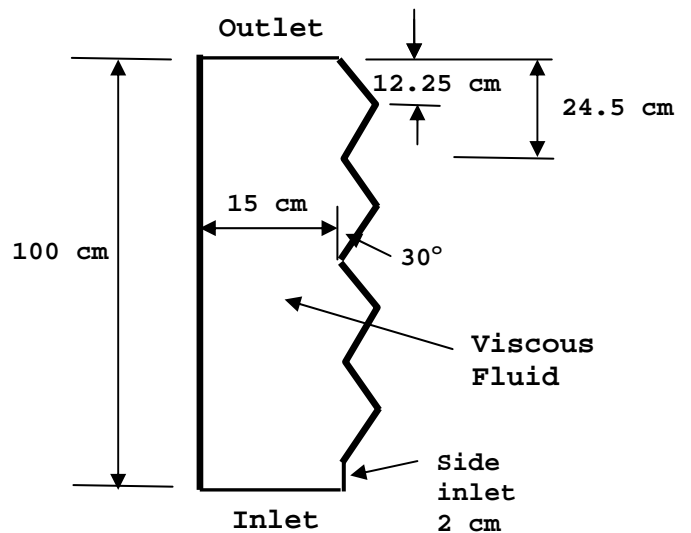
b) Assume that the elements are at temperature of 50°C and air at the inlet is at 20°C. Evaluate the temperature field for different flow rates. Also evaluate the net heat flux and the effective Nusselt number.

c) For the duct with and without roughness element assume that the air flow start at time zero and find the unsteady airflow velocity and the temperature field. Assume that initially there is no flow and air temperature is at 50°C. For the duct without roughness compared your solution with the exact solution.

Flow and Bubbly Flow in a Rough Duct

a) For an asymmetric duct as shown study flow of a Newtonian and non-Newtonian (power law) fluids. Assume that the velocity at the bottom inlet is $V=0.01$ m/s and the side inlet has zero velocity. Evaluate the velocity profile and pressure drop across the duct.

b) Repeat part a) when air is injected from the side inlet with a speed of 0.01 m/s. Use the VOF method and consider the cases that the liquid flow velocity is 0.01 m/s and when there is no liquid flow.



Similarity Solution

Boundary layer flow over a wedge in similarity form reduces to the Falkner-Skan equation given as

$$f''' + ff'' + \beta(1-f'^2) = 0.$$

Here β is the angle of the wedge and is given as

$$\beta = 2m/(m+1)$$

(The velocity of the outer potential flow is given as $U \propto x^m$.)

The boundary conditions are

$$\begin{array}{lll} \text{At } \eta = 0, & f = 0, & f' = 0. \\ \text{At } \eta = \infty, & f' = 1. & \end{array}$$

Use the values of $m = 0$, $m = 1$, and $m = 4$, and plot f , f' and f'' versus η .

For $m=0$ compare the results with that obtained from ANSYS-fluent code and the exact solution.

Boundary Layer Flow (ANSYS-Fluent)

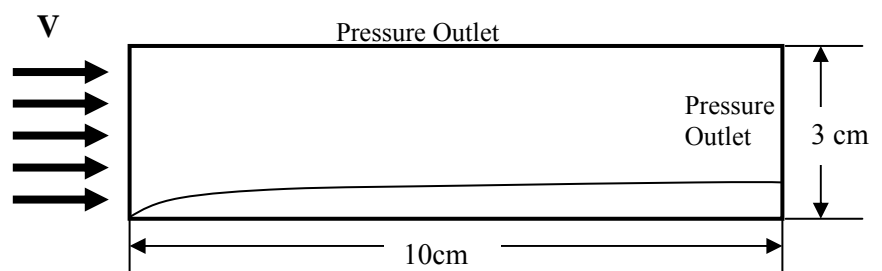
Evaluate the boundary layer flow over a flat plate. The boundary conditions for the top surface and the outlet are pressure outlet.

Determine the features of the boundary layer velocity profile for the case of laminar flow and evaluate the velocity contours,

velocity profiles, boundary layer thickness as a function of distance, and C_f and C_D .

Use an inlet velocity of 0.02 m/s and assume the flow is laminar flow.

Compare your findings with the theoretical predictions.



Report and Due Dates: The reports should include hard copies and electronic copies of the programs including FLUENT CAS and DAT files, figures, and discussion of the results. The due date for Parts 1 is November 12, 2019, and for Part 2 is December 3, 2019.

Guideline for Technical Report Writing

First page

Title of the project.

Names of the authors and their affiliations.

Abstract

Describe what is in the report, the key points and important findings.

Second Page

Introduction

Introduce the topic and give the back ground. Review the related works. In the literature survey, point to the gaps in the literature and set the stage for this work. Also give a summary of the main findings.

Technical Report

Formulation or Experimental setup

Experimental procedure

Results and Discussion

Note that all equations should be numbered consecutively. All assumptions should be clearly stated.

Note that all figures need to be numbered consecutively and each figure should be discussed.

Conclusions

State the conclusions of the study.

References

All references should be listed. All listed references should be referred to in the text.

Make sure to keep the same style in the references. References are given either by year or are numbered. e.g.,

Smith, J.D. (2000). Title of the paper. Journal of Probabilistic Mechanics, Vol. 4, pp. 345-356.

1. Smith, J.D., Title of the paper. Journal of Probabilistic Mechanics, Vol. 4, pp. 345-356 (2000).